

Name: _____

Date: _____

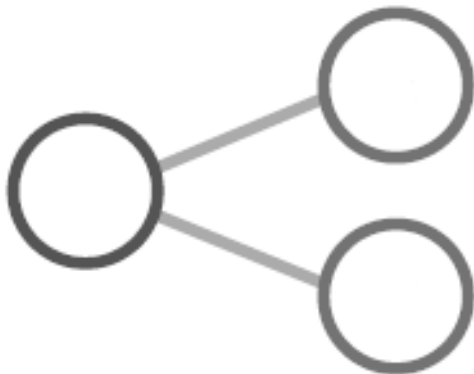

CHAPTER
4

Subtraction Facts to 10

To the Teacher:

Read aloud questions for children who may need assistance.

1. How many birds are left?

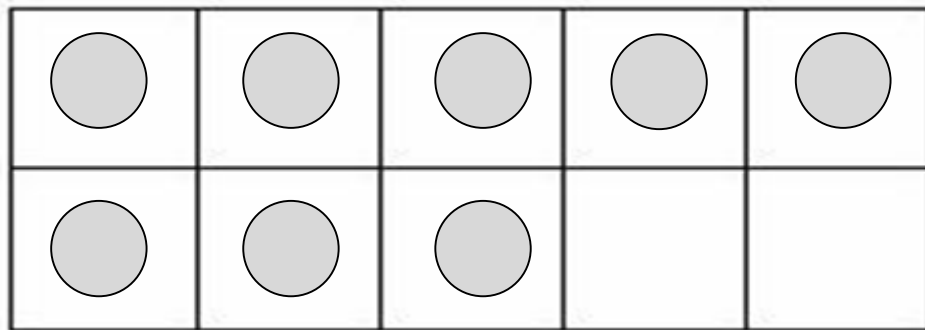


$$\boxed{} - \boxed{} = \boxed{}$$

There are birds left.

2. Julien has 8 toy cars.
He gives Gabriel 4.

a) Cross out to subtract.

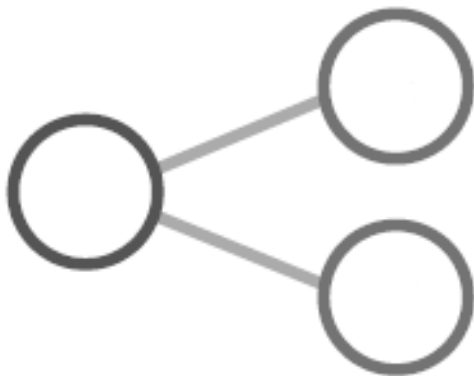


b) Write the subtraction sentence.

$$\boxed{} - \boxed{} = \boxed{}$$

Julien has $\boxed{}$ toy cars left.


3. There are 9 apples in a basket.
Quinn takes 2.
How many apples are left?



$$\boxed{} - \boxed{} = \boxed{}$$

There are apples left.

4. Write the fact family to match the picture.



<input type="text"/>	<input type="text"/>	<input type="text"/>	=	<input type="text"/>
<input type="text"/>	<input type="text"/>	<input type="text"/>	=	<input type="text"/>
<input type="text"/>	<input type="text"/>	<input type="text"/>	=	<input type="text"/>
<input type="text"/>	<input type="text"/>	<input type="text"/>	=	<input type="text"/>